

Following 8th and 9th questions will be answered according to the statement below.

Aylin, Burak, Ceren, Emrah, Fatoş, Gamze and Murat competed in a chess tournament. Following information is known about the tournament results: Fatoş became the last among female competitors; Aylin owns a higher degree than Burak and Ceren, but a lower degree than Gamze. Murat could only beat Emrah, and Ceren took the 4th place among competitors.

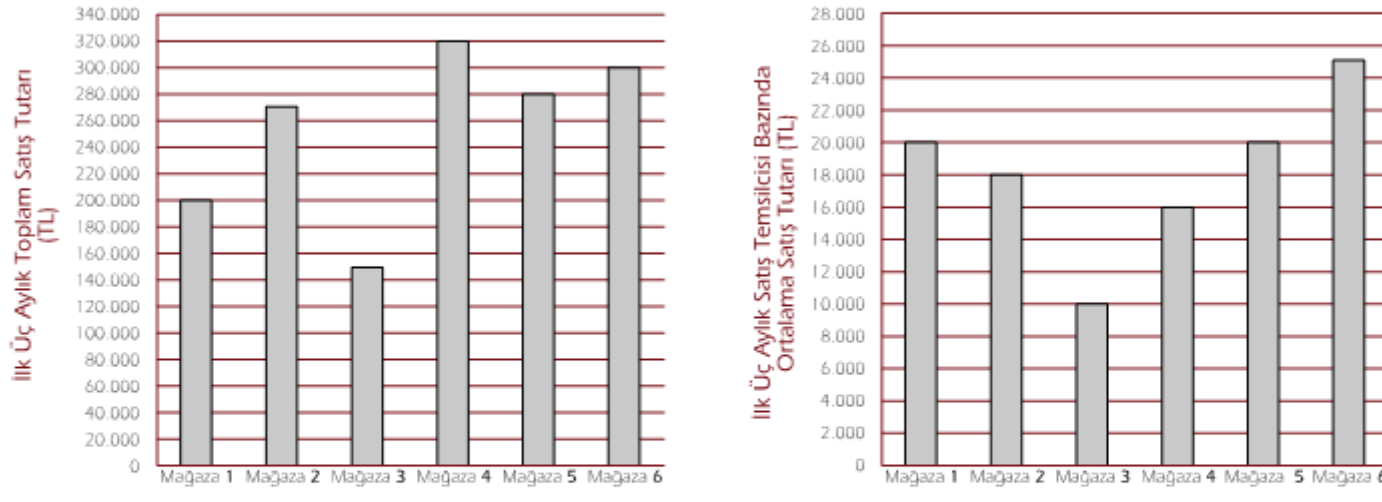
1. Which of the following competitors might have become the 6th in the tournament?

- a) Emrah
- b) Gamze
- c) Murat
- d) Aylin
- e) Fatoş

2. Given the statements above, which of the following is not true?

- a) Gamze owns a higher degree than Burak.
- b) First two degrees belong to female competitors.
- c) Burak owns a higher degree than Aylin.
- d) Ceren owns a lower degree than Burak.
- e) Fatoş owns a degree between Ceren and Murat.

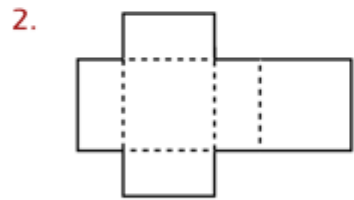
Aşağıdaki grafiklerde bir şirkete bağlı olarak çalışan mağazaların ilk üç aylık toplam satış tutarlarıyla satış temsilcisi başına düşen ortalama satış tutarları yer almaktadır.




- Regarding the first quarter sales amount, the turnover variance between best selling and the least selling stores is how much times the sales amount of least selling store? (Please choose the closest value)
a) 0,75 b) 1 c) 1,15 d) 2 e) 3
- Regarding the average sales amount on the basis of sales representative number, how many sales representative does the least selling store employ?
a) 11 b) 12 c) 13 d) 15 e) 16



Which of the following fits the “?” in given series?



Which of the following appears when the shape given above is folded from the dashed lines?

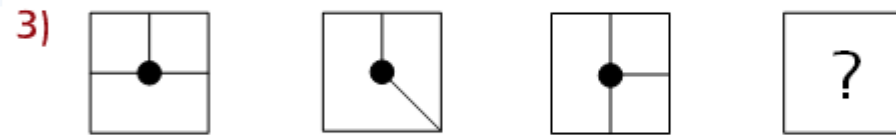


1) Which of the following is different?

- a) Article b) Tale c) Story d) Poem e) Novel
-

2) If a car travels 45 kilometers in 45 minutes, how many kilometers does this car take in an hour?

- a) 60 b) 20 c) 30 d) 40 e) 50
-



Which of the following fits the “?” shown in the series above?

